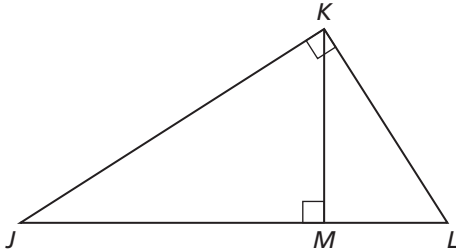


9.3

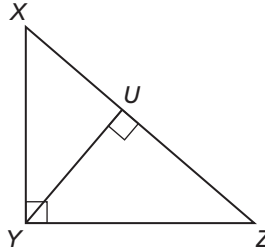
Practice A

In Exercises 1 and 2, identify the similar triangles.

1.

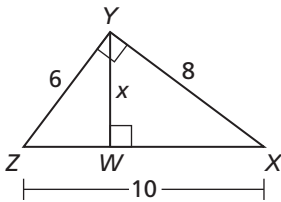


2.

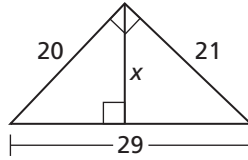


In Exercises 3–5, find the value of x .

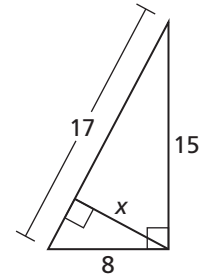
3.



4.



5.



In Exercises 6–8, find the geometric mean of the two numbers.

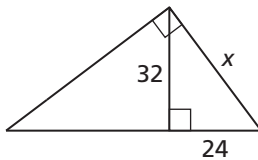
6. 3 and 12

7. 4 and 14

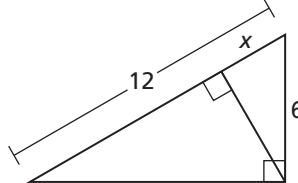
8. 10 and 24

In Exercises 9–11, find the value of x .

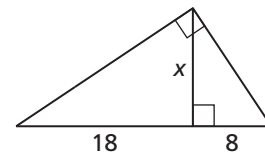
9.



10.



11.



12. You are designing a diamond-shaped kite. You know that $AB = 38.4$ centimeters, $BC = 72$ centimeters, and $AC = 81.6$ centimeters. You want to use a straight crossbar \overline{BD} . About how long should it be?

